



SATS 2018

Monday 14th May- Thursday 17th May

WHEN ARE THE SATS TESTS THIS YEAR?

- **Monday 14th May** - Key stage 2 English grammar, punctuation and spelling test, Paper 1, short answer questions. Key stage 2 English grammar, punctuation and spelling test, Paper 2, spelling.
- **Tuesday 15th May**- Key stage 2 English reading test, reading booklet and associated answer booklet.
- **Wednesday 16th May**- Key stage 2 mathematics, Paper 1 arithmetic test. Key stage 2 mathematics, Paper 2 reasoning.
- **Thursday 17th May**- Key stage 2 mathematics, Paper 3, reasoning.

THE SPAG TESTS

- The grammar, punctuation and spelling test will consist of two parts: a **grammar and punctuation paper** requiring short answers, lasting 45 minutes, and an **aural spelling test of 20 words**, lasting around 15 minutes.
- The grammar and punctuation test will include two sub-types of questions:
- **Selected response**, e.g. 'Identify the adjectives in the sentence below'
- **Constructed response**, e.g. 'Correct/complete/rewrite the sentence below,' or, 'The sentence below has an apostrophe missing. Explain why it needs an apostrophe.'

33

Insert a pair of **brackets** in the correct place in the sentence below.

Lisa who had been playing the piano since she was nine had achieved Grade 7.

_____ 1 mark

35

Explain how the use of **commas** changes the meaning in the two sentences.

Mangoes, which are grown in hot countries, taste delicious.

Mangoes which are grown in hot countries taste delicious.

_____ 1 mark

34

Tick one box in each row to show whether the underlined word is an **adjective** or an **adverb**.

Sentence	Adjective	Adverb
It is a <u>direct</u> flight to Spain.		
I hate arriving <u>late</u> .		
The door opened <u>wide</u> .		
That is the <u>wrong</u> spelling.		

_____ 1 mark

37

Rewrite the sentence below so that it is written in the **passive voice**. Remember to punctuate your answer correctly.

The pouring rain drenched us.

_____ 1 mark

THE READING TEST

- The reading test will be a single paper with questions based on three passages of text. **Your child will have one hour, including reading time, to complete the test.**
- There will be a selection of question types, including:
- **Ranking/ordering**, e.g. 'Number the events below to show the order in which they happen in the story'
- **Labelling**, e.g. 'Label the text to show the title of the story'
- **Find and copy**, e.g. 'Find and copy one word that suggests what the weather is like in the story'
- **Short constructed response**, e.g. 'What does the bear eat?'
- **Open-ended response**, e.g. 'Look at the sentence that begins *Once upon a time*. How does the writer increase the tension throughout this paragraph? Explain fully, referring to the text in your answer.'

- 28 In the paragraph beginning, *There were, as I say...* Malone compares the iguanodons to different animals.

How do these comparisons help the reader understand what the iguanodons look like?

1 mark

- 24 What is the main message of the poem?

Tick **one**.

People can learn a lot from holding small creatures.

☐

People should think about how their actions affect others.

☐

People are much bigger than frogs and snails.

☐

People should overcome their fear of nature.

☐

1 mark

- 25 Circle the correct option to complete each sentence below.

(a) The story is told from the perspective of...

Professor
Summerlee.

Lord John.

Malone.

Professor
Challenger.

1 mark

(b) At the start of the extract the men entered the forest...

carefully.

quickly.

fearfully.

noisily.

1 mark

(c) There, they came to a patch where the stream was...

smaller.

bigger.

faster.

slower.

1 mark

(d) The ferns here were spaced...

regularly.

randomly.

carefully.

equally.

1 mark

- 19 How does the snail behave when it is afraid?

Give **two** ways.

1. _____

2. _____

1 mark

THE MATHS TESTS

- Children will sit three papers in maths:
- Paper 1: **arithmetic**, 30 minutes
- Papers 2 and 3: **reasoning**, 40 minutes per paper
- Paper 1 will consist of fixed response questions, where children have to give the correct answer to calculations, including long multiplication and division. Papers 2 and 3 will involve a number of question types, including:
- Multiple choice
- True or false
- Constrained questions, e.g. giving the answer to a calculation, drawing a shape or completing a table or chart
- Less constrained questions, where children will have to explain their approach for solving a problem

31

$$20 - 4 \times 2 =$$

1 mark

32

$$\frac{2}{5} \div 2 =$$

1 mark

33

$$1\frac{1}{5} - \frac{1}{4} =$$

1 mark

26

$$\frac{1}{4} \times \frac{1}{8} =$$

1 mark

27

$$95\% \text{ of } 240 =$$

1 mark

28

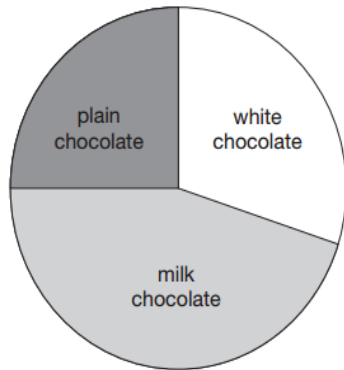
$$234,897 - 45,996 =$$

1 mark

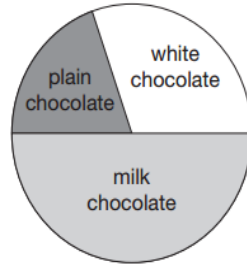
18

100 girls and 50 boys were asked which kind of chocolate they like best.

These two pie charts show the results.



100 girls



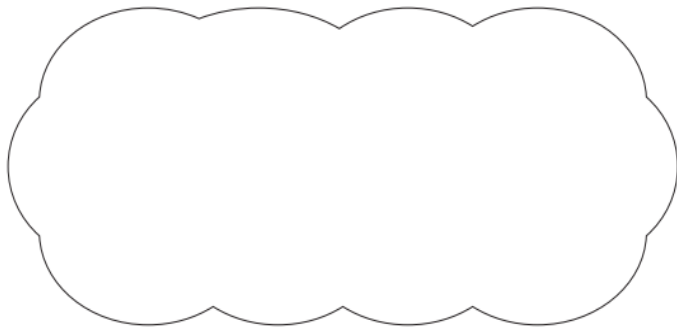
50 boys

Dev says,

"The pie charts show that more girls than boys liked milk chocolate best."

Dev is correct.

Explain how you know.



1 mark

20

On Saturday Lara read $\frac{2}{5}$ of her book.



On Sunday she read the **other** 90 pages to finish the book.

How many pages are there in Lara's book?

Show
your
method

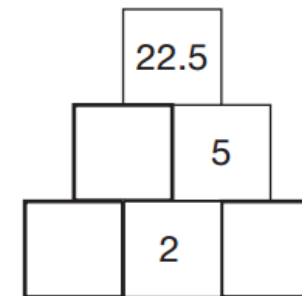
A large grid for showing the method. A small box labeled 'pages' is located at the bottom right of the grid.

14

Here is a number pyramid.

The number in a box is the **product** of the two numbers below it.

Write the missing numbers.




HOW WILL THE KEY STAGE 2 SATS BE MARKED?

- The previous national curriculum levels are no longer in use, and instead children will be given scaled scores. **You will be given your child's raw score (the actual number of marks they get), alongside their scaled score and whether they have reached the national average.**
- You and your child will find out the results on their Year 6 report.

ARRANGEMENTS FOR YOUR CHILD IN SCHOOL DURING SATS WEEK

- During the week, breakfast will be available in school for any pupils who would like it from 8:15am. This is optional; some pupils may prefer to have breakfast at home.
- Pupils must ensure that they are in school on time.
- School aims to begin each paper at approximately 9:00am.



ANY QUESTIONS?

March 2016 - Trending apps with young people

TEXTING APPS



kik messenger



whatsapp



oovoo

MICRO-BLOGGING APPS AND SITES



vine



instagram



tumblr



twitter

SELF-DESTRUCTING/SECRET APPS




Burn note



snapchat



whisper



YikYak

CHATTING, MEETING, DATING APPS AND SITES



meetme



Tinder



Omegle



skout

LIVE-STREAMING VIDEO APPS



Now



Musical.ly



Roblox

The Answers

Warnings Issued Over Children's Online Game Roblox



Warnings have been issued by parents about the popular online game Roblox after their children were sent inappropriate messages from adults.



INTERNET MATTERS

- Parent controls:
- <https://www.internetmatters.org/parental-controls/>